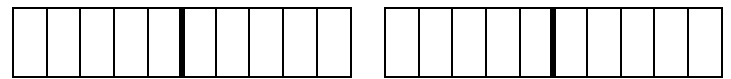


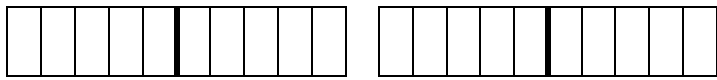
$$8 + 6 = \dots\dots\dots$$

$$\square + \square + \square = \dots\dots\dots$$



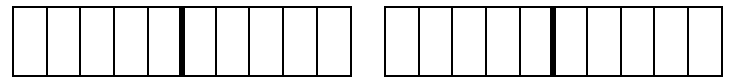
$$9 + 2 = \dots\dots\dots$$

$$\square + \square + \square = \dots\dots\dots$$



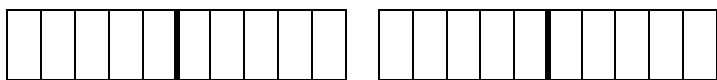
$$7 + 8 = \dots\dots\dots$$

$$\square + \square + \square = \dots\dots\dots$$



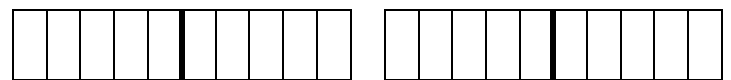
$$8 + 4 = \dots\dots\dots$$

$$\square + \square + \square = \dots\dots\dots$$



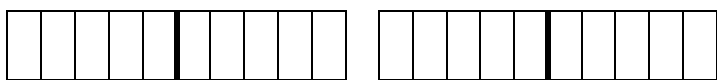
$$5 + 6 = \dots\dots\dots$$

$$\square + \square + \square = \dots\dots\dots$$



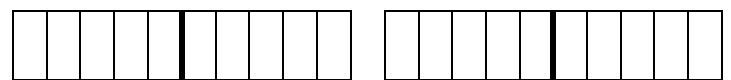
$$5 + 7 = \dots\dots\dots$$

$$\square + \square + \square = \dots\dots\dots$$



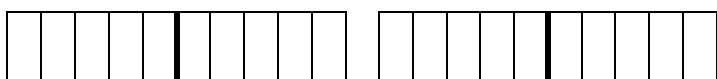
$$9 + 9 = \dots\dots\dots$$

$$\square + \square + \square = \dots\dots\dots$$



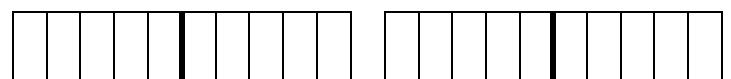
$$3 + 8 = \dots\dots\dots$$

$$\square + \square + \square = \dots\dots\dots$$



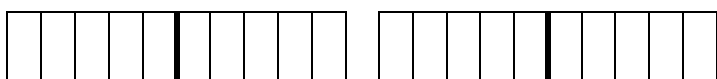
$$8 + 5 = \dots\dots\dots$$

$$\square + \square + \square = \dots\dots\dots$$



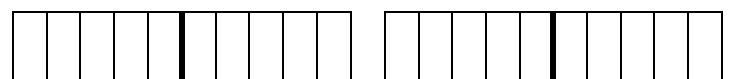
$$2 + 9 = \dots\dots\dots$$

$$\square + \square + \square = \dots\dots\dots$$



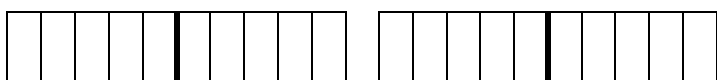
$$7 + 9 = \dots\dots\dots$$

$$\square + \square + \square = \dots\dots\dots$$



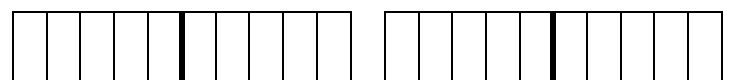
$$3 + 9 = \dots\dots\dots$$

$$\square + \square + \square = \dots\dots\dots$$



$$6 + 8 = \dots\dots\dots$$

$$\square + \square + \square = \dots\dots\dots$$



$$6 + 6 = \dots\dots\dots$$

$$\square + \square + \square = \dots\dots\dots$$

www.sansaldero.it

LE ADDIZIONI CON LA "TAPPA" AL 10. COLORA LE CASELLE E OSSERVA! SCOMPONI IL SECONDO ADDENDO IN MODO INTELLIGENTE. COLORA I PRIMI DUE RIQUADRI CHE CONTENGONO GLI "AMICI DEL 10" PER VELOCIZZARE IL CALCOLO.