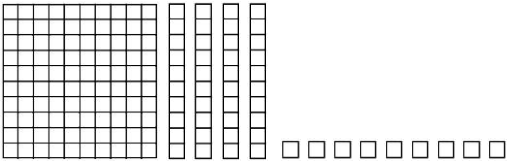
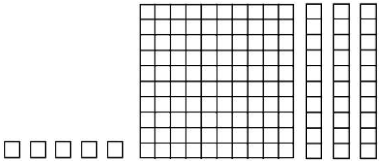
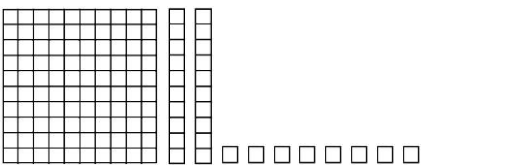

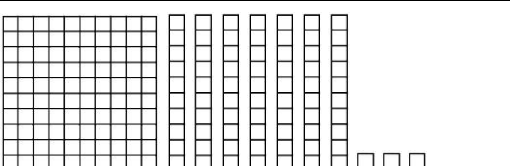
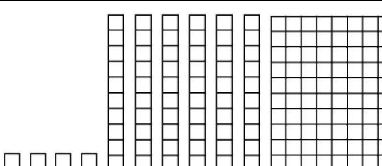
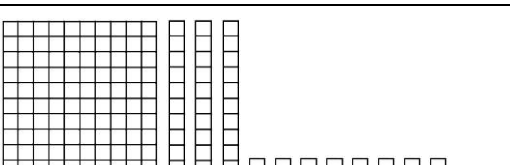
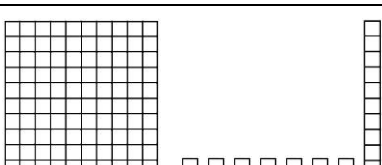
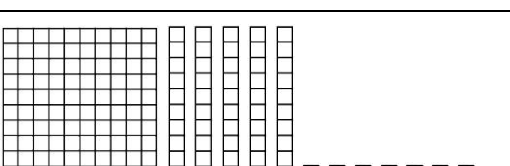
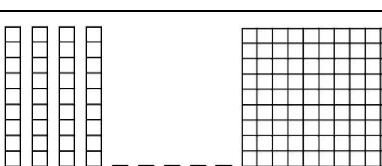
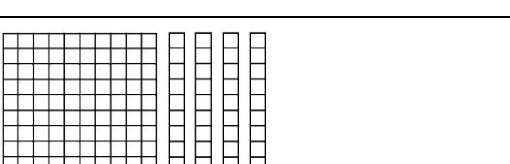
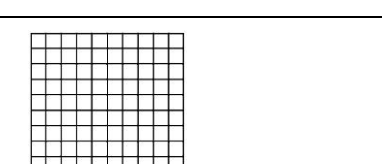

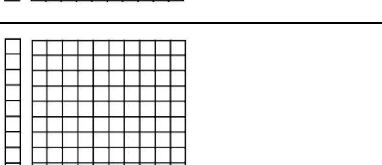
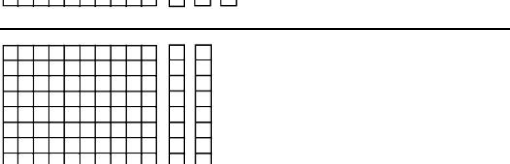

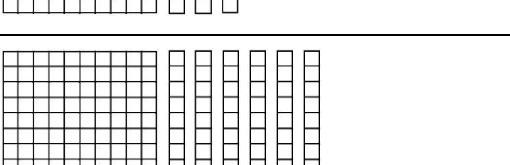



Centinaia, decine, unità: registra in tabella e completa osservando l'esempio.

| Blocchi Aritmetici Multibase | h | da | u | Blocchi Aritmetici Multibase | h | da | u |
|--|-----|-----|-----|--|-----|-----|-----|
|  | 1 | 4 | 9 |  | ... | ... | ... |
|  | 100 | 40 | 9 |  | ... | ... | ... |
|  | ... | ... | ... |  | ... | ... | ... |
|  | ... | ... | ... |  | ... | ... | ... |
|  | ... | ... | ... |  | ... | ... | ... |
|  | ... | ... | ... |  | ... | ... | ... |
|  | ... | ... | ... |  | ... | ... | ... |
|  | ... | ... | ... |  | ... | ... | ... |
|  | ... | ... | ... |  | ... | ... | ... |

www.sansaldero.it

Qual è il numero maggiore? Qual è il numero minore?