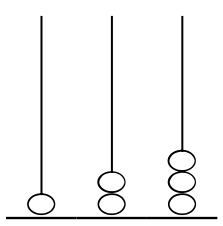
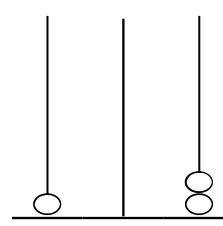
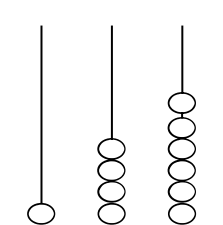
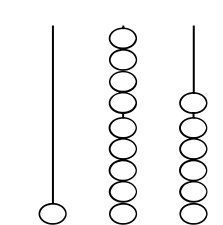
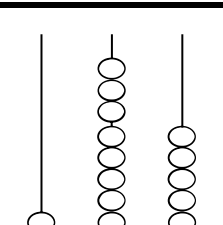
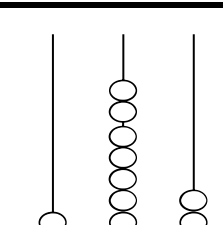
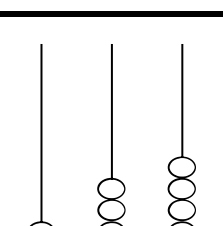
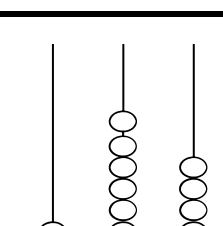
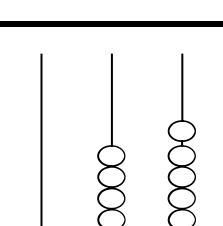

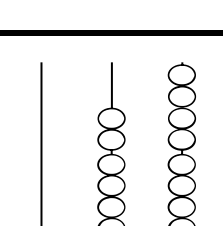
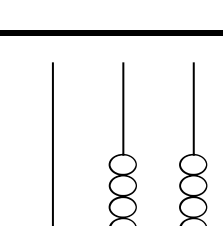


Scrivi in lettere il numero che precede e in cifre quello che segue.

| | | | | | |
|---|---|-------------------------|---|---|-------------------------|
| <p>.....</p> <p>.....</p> <p>.....</p> <p>P D</p> |  | <p>.....</p> <p>P D</p> | <p>.....</p> <p>.....</p> <p>.....</p> <p>P D</p> |  | <p>.....</p> <p>P D</p> |
| <p>.....</p> <p>.....</p> <p>.....</p> <p>P D</p> |  | <p>.....</p> <p>P D</p> | <p>.....</p> <p>.....</p> <p>.....</p> <p>P D</p> |  | <p>.....</p> <p>P D</p> |
| <p>.....</p> <p>.....</p> <p>.....</p> <p>P D</p> |  | <p>.....</p> <p>P D</p> | <p>.....</p> <p>.....</p> <p>.....</p> <p>P D</p> |  | <p>.....</p> <p>P D</p> |
| <p>.....</p> <p>.....</p> <p>.....</p> <p>P D</p> |  | <p>.....</p> <p>P D</p> | <p>.....</p> <p>.....</p> <p>.....</p> <p>P D</p> |  | <p>.....</p> <p>P D</p> |
| <p>.....</p> <p>.....</p> <p>.....</p> <p>P D</p> |  | <p>.....</p> <p>P D</p> | <p>.....</p> <p>.....</p> <p>.....</p> <p>P D</p> |  | <p>.....</p> <p>P D</p> |
| <p>.....</p> <p>.....</p> <p>.....</p> <p>P D</p> |  | <p>.....</p> <p>P D</p> | <p>.....</p> <p>.....</p> <p>.....</p> <p>P D</p> |  | <p>.....</p> <p>P D</p> |

Cerchia P se la casella contiene un numero pari o D se ne contiene uno dispari.